



# education

DEPARTMENT: EDUCATION  
MPUMALANGA PROVINCE

**NATIONAL  
SENIOR CERTIFICATE**

**GRADE 12**

**PHYSICAL SCIENCES: CHEMISTRY P2**

**JUNE 2021**

**MARKS: 150**

**TIME: 3 hours**

**This question paper consists of 15 pages and 4 data sheets.**

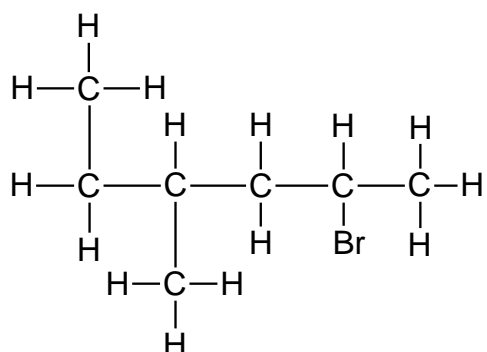
## INSTRUCTIONS AND INFORMATION

1. Write your name in the appropriate space on the ANSWER BOOK.
2. This question paper consists of TEN questions. Answer ALL the questions in the ANSWER BOOK.
3. Start EACH question on a NEW page in the ANSWER BOOK.
4. Number the answers correctly according to the numbering system used in this question paper.
5. Leave ONE line between two sub questions, for example between QUESTION 2.1 and QUESTION 2.2.
6. You may use a non-programmable calculator.
7. You may use appropriate mathematical instruments.
8. You are advised to use the attached DATA SHEETS.
9. Show ALL formulae and substitutions in ALL calculations.
10. Round off your final numerical answers to a MINIMUM of TWO decimal places.
11. Give brief motivations, discussions, et cetera where required.
12. Write neatly and legibly.

## QUESTION 1 : MULTIPLE-CHOICE QUESTIONS

Four options are provided as possible answers to the following questions. Each question has only ONE correct answer. Choose the answer and write only the letter (A – D) next to the question number (1.1 – 1.10) in the ANSWER BOOK, for example, 1.11 E.

- 1.1 The correct IUPAC name of the compound with the structural formula shown below, is ...



- A 1,2-dimethyl-4-bromopentane  
 B 2-bromo-4,5-dimethylpentane  
 C 4-methyl-2-bromohexane  
 D 2-bromo-4-methylhexane (2)

- 1.2 Which ONE of the formulae below represents an ALDEHYDE?

- A  $C_2H_4O_2$   
 B  $C_4H_8O$   
 C  $C_5H_{12}O$   
 D  $CH_2O_4$  (2)

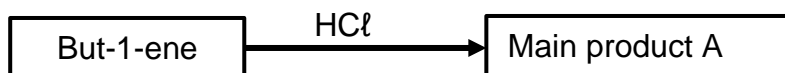


- 1.3 In which ONE of the following options are the four compounds arranged in order of DECREASING boiling points?

A	$CH_3CH_2CH_3$	$CH_3CH_2CHO$	$CH_3CH_2CH_2OH$	$CH_3CH_2COOH$
B	$CH_3CH_2CHO$	$CH_3CH_2CH_2OH$	$CH_3CH_2CH_3$	$CH_3CH_2COOH$
C	$CH_3CH_2COOH$	$CH_3CH_2CH_2OH$	$CH_3CH_2CHO$	$CH_3CH_2CH_3$
D	$CH_3CH_2COOH$	$CH_3CH_2CHO$	$CH_3CH_2CH_2OH$	$CH_3CH_2CH_3$

(2)

1.4 Refer to the flow diagram below.

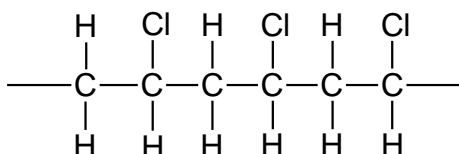


The name of main product A as well as the type of reaction taking place are:

	MAIN PRODUCT A	TYPE OF REACTION
A	2-chlorobutane	Halogenation
B	2-chlorobutane	Hydrohalogenation
C	1-chlorobutane	Halogenation
D	1-chlorobutane	Hydrohalogenation

(2)

1.5 The following polymer is the result of addition polymerisation.

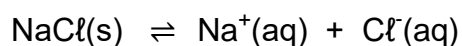


Which ONE of the following is the monomer of the above mentioned polymer?

- A Ethene
- B Propene
- C Chloroethene
- D Chloromethane

(2)

1.6 The reaction for a saturated salt solution is shown below:

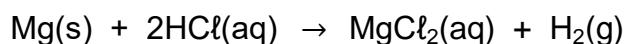


Which ONE of the following changes will favour the reverse reaction?

- A Heat the solution
- B Increase the pressure on the system
- C Add concentrated hydrochloric acid (HCl).
- D Bubble chlorine (Cl<sub>2</sub>) gas through the solution.

(2)

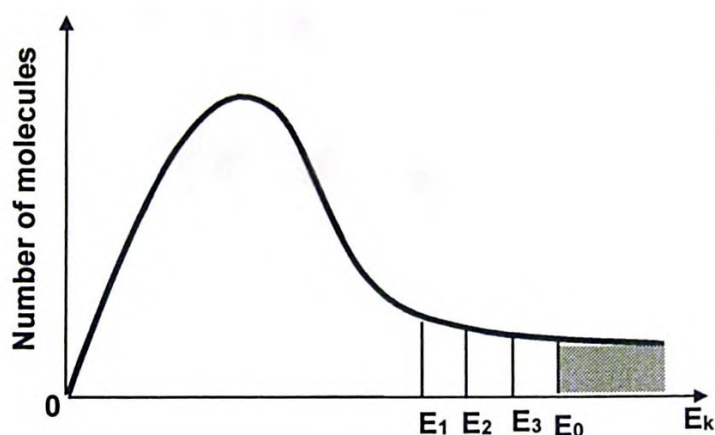
1.7 Consider the chemical reaction represented by the equation below:



Which ONE of the following changes will increase the rate of production of  $\text{H}_2\text{(g)}$ ?

- A Increase pressure
- B Increase volume of  $\text{HCl(aq)}$
- C Decrease concentration of  $\text{HCl(aq)}$
- D Increase temperature (2)

1.8 THREE catalysts are used separately to increase the rate of a hypothetical reaction. In the diagram below,  $E_1$ ,  $E_2$  and  $E_3$  represent the effect of each catalyst on the activation energy ( $E_0$ ) for the reaction.



Which ONE of the following is the activation energy for the reaction with the highest rate?

- A  $E_1$
- B  $E_2$
- C  $E_3$
- D  $E_0$  (2)

- 1.9 If the concentration of a sodium hydroxide (NaOH) solution is  $0,01 \text{ mol}\cdot\text{dm}^{-3}$ , then the  $\text{OH}^{-}(\text{aq})$  concentration of the NaOH(aq) and the pH-value of the NaOH(aq) at  $25^{\circ}\text{C}$  will be ...

	<b>[OH<sup>-</sup>] (mol·dm<sup>-3</sup>)</b>	<b>pH</b>
A	$10^{-12}$	12
B	$10^{-12}$	2
C	$10^{-2}$	12
D	$10^{-2}$	2

(2)

- 1.10 If base **X** is titrated against acid **Y**, the pH at the endpoint is 9.

Which ONE of the following combinations CORRECTLY represents base **X** and acid **Y**?

	<b>Base X</b>	<b>Acid Y</b>
A	KOH	$\text{HNO}_3$
B	NaOH	$\text{CH}_3\text{COOH}$
C	$\text{NH}_3$	$\text{H}_2\text{SO}_4$
D	$\text{NaHCO}_3$	$\text{HCl}$

(2)

**[20]**

**QUESTION 2 (Start on a new page)**



Consider the following eight organic compounds represented by letters **A** to **H**.

<b>A</b>	Propanone	<b>B</b>	$C_2H_4$
<b>C</b>	$CH_3CH_2CH_2OH$	<b>D</b>	<pre>       H             H-C-H           H   C   H   H   H                  H-C - C - C - C - C-H                     H   Cl  Br  H   H                       H-C-H                         H           </pre>
<b>E</b>	<pre>       H   H   H                     H-C - C - C=O                   H   H           </pre>	<b>F</b>	$CH_3COOH$
<b>G</b>	2,2-dimethylpropane	<b>H</b>	<pre>       H   H   O       H   H   H                                     H-C - C - C - O - C - C - C-H                                       H   H           H   H   H           </pre>

2.1 Write down the LETTER that represents the following:

2.1.1 A weak monoprotic acid. (1)

2.1.2 A CHAIN ISOMER of  $CH_3(CH_2)_3CH_3$ . (1)

2.1.3 A compound used as reactant in the preparation of compound **H**. (1)

2.2 Write down the:

2.2.1 Structural formula of the functional group of compound **A**. (2)

2.2.2 Name of the homologous series to which compound **F** belongs. (1)

2.2.3 IUPAC name of compound **H** (2)

2.2.4 IUPAC name of compound **D** (3)

2.3 Compound **C** is a primary alcohol

2.3.1 Define the term *primary alcohol*. (2)

2.3.2 Write down the STRUCTURAL FORMULA of the POSITIONAL isomer of compound **C**. (2)

2.4 Compound **B** is considered as *unsaturated*.

- 2.4.1 Give a reason why compound **B** is unsaturated. (1)
- 2.4.2 Write down the NAME of a solution that you can use in the laboratory to test whether compound **B** is unsaturated. (1)
- 2.4.3 What will be observed when this solution is added to compound **B**? (2)
- 2.4.4 Write down the IUPAC name of the product formed. (2)
- [21]**

### QUESTION 3 (Start on a new page)

An experiment is conducted to determine the boiling point of organic compounds from different homologous series under the same conditions.

COMPOUND	NAME	MOLECULAR FORMULA
<b>P</b>	Hexane	$C_6H_{14}$
<b>Q</b>	2,3-dimethylbutane	$C_6H_{14}$
<b>R</b>	Methyl propanoate	$C_4H_8O_2$
<b>S</b>	Pentan-1-ol	$C_5H_{12}O$

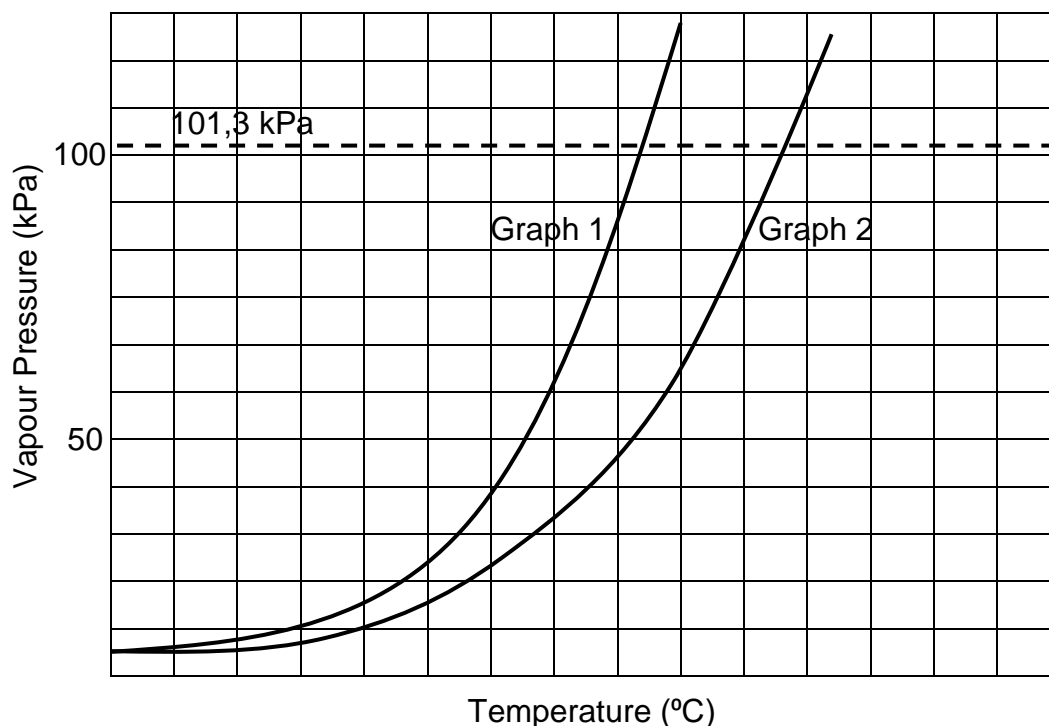
Consider the boiling points of compounds **P** to **S** given in random order below and use them, where applicable, to answer the questions that follow.

79,8 °C	68 °C	138,5 °C	57,9 °C
---------	-------	----------	---------

- 3.1 Write down the:
- 3.1.1 Independent variable for this experiment (1)
- 3.1.2 STRUCTURAL FORMULA of compound **R**. (2)
- 3.1.3 Boiling point of compound **R**. (1)
- 3.1.4 Boiling point of compound **S**. (1)
- 3.2 Explain the difference in boiling points between compounds **R** and **S**. (4)



- 3.3 The following graph shows the relationship between vapour pressure and temperature of compounds **P** and **Q**. The dotted line indicates the external atmospheric pressure.

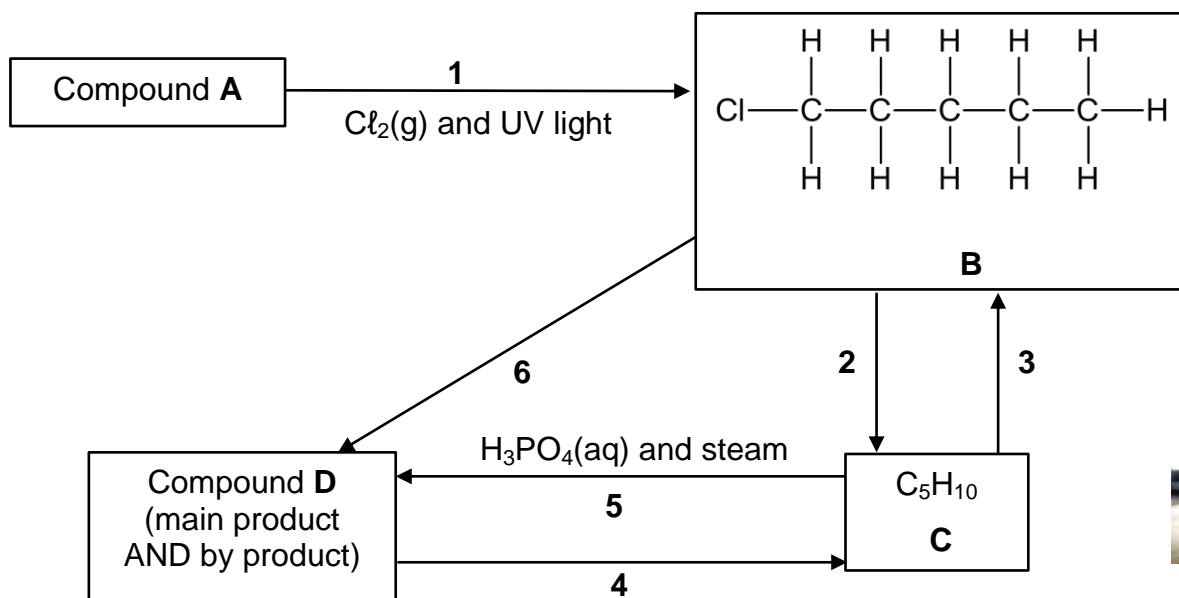


- 3.3.1 Define the term *vapour pressure*. (2)
- 3.3.2 Using molecular formulae, write down the balanced equation for the complete combustion of compound **P**. (3)
- 3.3.3 Which ONE of the compounds **P** or **Q** is represented by GRAPH 2? (1)
- 3.3.4 Fully explain the answer to QUESTION 3.3.3 (3)
- 3.3.5 Redraw graph 2 in your answer book. On the same set of axes sketch the curve that will be obtained for compound **S**. (2)

**[20]**

# QUESTION 4 (Start on a new page)

Consider the flow chart below showing different organic reactions, and answer the questions that follow. **A** to **D** are organic compounds, and **1** to **6** are organic reactions.

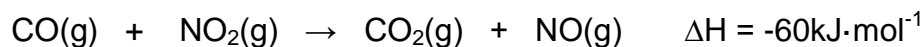


- 4.1 Compound **A** is a hydrocarbon
  - 4.1.1 Define the term *hydrocarbon*. (2)
  - 4.1.2 Write down the IUPAC name of compound **A**. (1)
- 4.2 Identify the TYPE of reaction for each of the following:
  - 4.2.1 Reaction **1** (1)
  - 4.2.2 Reaction **5** (1)
  - 4.2.3 Reaction **6** (1)
- 4.3 Draw the structural formula of the main product for reaction **5** and write down its IUPAC name. (3)
- 4.4 Write down the type of addition reaction represented at reaction **3**. (1)
- 4.5 Write down the NUMBER of the reaction that would take place if the relevant organic compound was heated strongly in the presence of concentrated alcoholic potassium hydroxide. (1)

[11]

**QUESTION 5: (Start on a new page)**

Study the following chemical equation:



- 5.1 Use the above equation and draw a potential energy diagram. Label the specific reactants and products, as well as the activation energy and heat of reaction. (4)
- 5.2 Define the term *catalyst*. (2)
- 5.3 The following table shows two catalysts that can be used for this reaction and their corresponding activation energies.


Catalyst	Activation energy ( $\text{kJ}\cdot\text{mol}^{-1}$ )
Platinum catalyst	70,6
Osmium catalyst	104,6

Which catalyst, PLATINUM or OSMIUM will be more effective for this reaction? Use the collision theory to explain the answer.

(4)  
[10]

**QUESTION 6: (Start on a new page)**

A student investigates the reaction rate between magnesium and sulphuric acid. The balanced equation for the reaction that takes place is:



The student repeats the experiment a few times with different concentrations of sulphuric acid. All the other variables are kept constant.

The results are recorded in the table below:

Concentration of sulphuric acid ( $\text{mol}\cdot\text{dm}^{-3}$ )	Rate of reaction ( $\text{cm}^3\cdot\text{s}^{-1}$ )
0,4	4,2
0,8	8,5
1,6	17,0

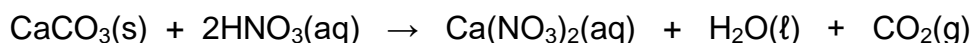
- 6.1 Formulate an investigative question for this investigation. (2)
- 6.2 Write down ONE variable that must be kept constant. (1)
- 6.3 What will be the effect on the reaction rate if lumps of magnesium are used (1)

instead of powered magnesium? Write only: INCREASE, DECREASE or REMAIN THE SAME.

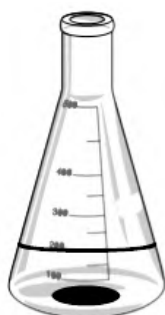
6.4 Use the collision theory to explain the answer to QUESTION 6.3. (3)

6.5 What will be the effect on the rate of reaction if the temperature increases from 20°C to 30°C? Write only: INCREASE, DECREASE or REMAIN THE SAME. (1)

An experiment was conducted to investigate the rate of reaction between EXCESS calcium carbonate and dilute nitric acid. The balanced chemical equation for this reaction is given below.



**Flask A**



200 cm<sup>3</sup>, 0,3 mol·dm<sup>-3</sup>  
HNO<sub>3</sub>(aq) at 25°C

4,5 g lump CaCO<sub>3</sub>(s)

**Flask B**



300 cm<sup>3</sup>, 0,3 mol·dm<sup>-3</sup>  
HNO<sub>3</sub>(aq) at 25°C

6.6 Calculate the volume of CO<sub>2</sub>(g) produced at STP in flask A. (4)


6.7 Use the answer in QUESTION 6.6 to calculate the rate of reaction in flask A for the first 20 s in (dm<sup>3</sup>·s<sup>-1</sup>) (3)

6.8 How will the rate of reaction in flask B compare to that in flask A? Choose from GREATER THAN A, LESS THAN A or EQUAL TO A. (1)

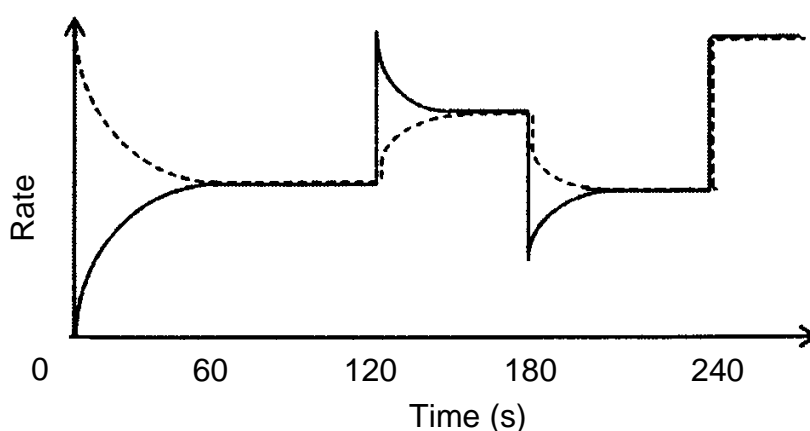
**[16]**

**QUESTION 7: (Start on a new page)**

Gas  $A_2B$  is introduced into a flask, which is then sealed, and allowed to reach dynamic chemical equilibrium at a certain temperature. The balanced chemical equation for the reaction is:



The graph below shows the change in the rates of the forward and reverse reactions with time. The solid line represents the reverse reaction.




- 7.1 Define the term *dynamic equilibrium*. (2)
- 7.2 At  $t = 120$  s the volume of the container is decreased, which leads to an increase in pressure. (2)
- 7.2.1 The graph shows that at  $t = 120$  s, both the forward and reverse reactions initially (immediately) increase at the same rate. Explain this observation. (2)
- 7.2.2 Which reaction is favoured between  $t = 120$  s and  $t = 150$  s? (FORWARD or REVERSE) (1)
- 7.2.3 Using Le Chatelier's Principle explain the answer to QUESTION 7.2.2. (2)
- 7.3 At  $t = 180$  s the temperature in the container is decreased. Is the forward reaction EXOTHERMIC or ENDOTHERMIC? Explain the answer. (3)
- 7.4 What change was made at  $t = 240$  s? (1)
- 7.5 How does the concentration of  $A_2B$  change between  $t = 230$  s and  $t = 250$  s? Write only INCREASES, DECREASES or REMAINS THE SAME. Explain the answer. (3)

7.6 What will the effect be on the equilibrium constant ( $K_c$ ) for ...  
(Write only INCREASE, DECREASE or NO EFFECT.)

7.6.1 The increase in pressure at  $t = 120$  s. (1)

7.6.2 The decrease in temperature at  $t = 180$  s. (1)

7.7 Initially 5,1 moles of gas  $A_2B$  are introduced into a reaction flask. The flask is then sealed and kept at a constant temperature. The gas  $A_2B$  decomposes as shown in the balanced chemical equation below:



When dynamic chemical equilibrium is reached, 3,6 mol  $A_2$  gas remained in the flask. The concentration of gas  $A_2$  in the flask at equilibrium is  $1,2 \text{ mol} \cdot \text{dm}^{-3}$ . Calculate the value of the equilibrium constant ( $K_c$ ) for this reaction at this constant temperature.

(7)  
[23]

#### QUESTION 8: (Start on a new page)

8.1 A learner prepares a sulphuric acid ( $H_2SO_4$ ) solution with a concentration of  $0,25 \text{ mol} \cdot \text{dm}^{-3}$ .

8.1.1 Give a reason why sulphuric acid is referred to as a diprotic acid. (2)

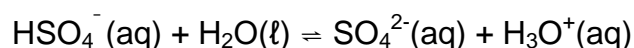
8.1.2 Determine the pH of this solution. (4)

8.1.3 The learner takes  $20 \text{ cm}^3$  of this solution and dilutes it to a solution with a concentration of  $0,1 \text{ mol} \cdot \text{dm}^{-3}$ . Calculate the volume of water that was added to the initial  $20 \text{ cm}^3$  solution. (4)

8.2 A few crystals of ammonium chloride ( $NH_4Cl$ ) are added to water in a test tube. The pH of the solution is less than 7.

Explain with the aid of a balanced equation why the pH is less than 7. (3)

8.3 The hydrogen sulphate ion ( $HSO_4^-$ ) can act as both an acid and a base. It reacts with water according to the following balanced equation:



8.3.1 Write down ONE word for a substance that can act as both an acid and a base. (1)

8.3.2 Write down the FORMULAE of two bases in the above reaction. (2)

- 8.4 A small amount of NaOH is added to pure water at a temperatures of 25 °C. How will this affect the:

(Choose between: INCREASES, DECREASES or NO CHANGE.)

8.4.1  $K_w$

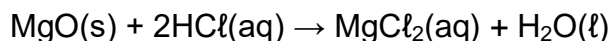


(1)

8.4.2  $[H_3O^+]$

(1)

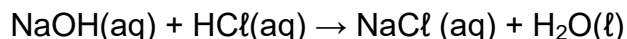
- 8.5 A learner wants to determine the percentage magnesium oxide in a health tablet. She dissolves the tablet in 50 cm<sup>3</sup> of 0,8 mol·dm<sup>-3</sup> hydrochloric acid solution. The balanced equation for the reaction is:



- 8.5.1 Calculate the number of moles of acid present in 50 cm<sup>3</sup> of a 0,8 mol·dm<sup>-3</sup> hydrochloric acid solution.

(3)

Not all of the hydrochloric acid reacts. She titrates the excess hydrochloric acid with a sodium hydroxide solution. It takes 20 cm<sup>3</sup> of the 0,5 mol·dm<sup>-3</sup> of sodium hydroxide solution to neutralise the excess hydrochloric acid. The hydrochloric acid and sodium hydroxide react as shown in the balanced equation below.



- 8.5.2 The original mass of the tablet is 0,96 g. Calculate the percentage of magnesium oxide in the tablet.

(8)

[29]

**GRAND TOTAL [150]**

**DATA FOR PHYSICAL SCIENCES GRADE 12  
PAPER 2 (CHEMISTRY)**

**GEGEWENS VIR FISIESE WETENSKAPPE GRAAD 12  
VRAESTEL 2 (CHEMIE)**

**TABLE 1: PHYSICAL CONSTANTS/TABEL 1: FISIESE KONSTANTES**

NAME/NAAM	SYMBOL/SIMBOOL	VALUE/WAARDE
Standard pressure Standaarddruk	$p^{\theta}$	$1,013 \times 10^5 \text{ Pa}$
Molar gas volume at STP Molêre gasvolume by STD	$V_m$	$22,4 \text{ dm}^3 \cdot \text{mol}^{-1}$
Standard temperature Standaardtemperatuur	$T^{\theta}$	$273 \text{ K}$
Avogadro's constant	$N_A$	$6,023 \times 10^{23} \text{ mol}^{-1}$

**TABLE 2: FORMULAE/TABEL 2: FORMULES**

$n = \frac{m}{M}$	$n = \frac{N}{N_A}$
$c = \frac{n}{V}$ OR/OF $c = \frac{m}{MV}$	$n = \frac{V}{V_m}$
$\frac{n_a}{n_b} = \frac{c_a V_a}{c_b V_b}$	$\text{pH} = -\log[\text{H}_3\text{O}^+]$
$K_w = [\text{H}_3\text{O}^+][\text{OH}^-] = 1 \times 10^{-14} \text{ at/ by } 298 \text{ K}$	
$E_{\text{cell}}^{\theta} = E_{\text{cathode}}^{\theta} - E_{\text{anode}}^{\theta} / E_{\text{sel}}^{\theta} = E_{\text{katode}}^{\theta} - E_{\text{anode}}^{\theta}$ OR/OF $E_{\text{cell}}^{\theta} = E_{\text{reduction}}^{\theta} - E_{\text{oxidation}}^{\theta} / E_{\text{sel}}^{\theta} = E_{\text{reduksie}}^{\theta} - E_{\text{oksidasie}}^{\theta}$ OR/OF $E_{\text{cell}}^{\theta} = E_{\text{oxidisingagent}}^{\theta} - E_{\text{reducingagent}}^{\theta} / E_{\text{sel}}^{\theta} = E_{\text{oksideermiddel}}^{\theta} - E_{\text{reduseermiddel}}^{\theta}$	



**TABLE 4A: STANDARD REDUCTION POTENTIALS**  
**TABEL 4A: STANDAARD-REDUKSIEPOTENSIALE**

Half-reactions/ <i>Halfreaksies</i>		$E^{\theta}$ (V)
$F_2(g) + 2e^- \rightleftharpoons 2F^-$		+ 2,87
$Co^{3+} + e^- \rightleftharpoons Co^{2+}$		+ 1,81
$H_2O_2 + 2H^+ + 2e^- \rightleftharpoons 2H_2O$		+1,77
$MnO_4^- + 8H^+ + 5e^- \rightleftharpoons Mn^{2+} + 4H_2O$		+ 1,51
$Cl_2(g) + 2e^- \rightleftharpoons 2Cl^-$		+ 1,36
$Cr_2O_7^{2-} + 14H^+ + 6e^- \rightleftharpoons 2Cr^{3+} + 7H_2O$		+ 1,33
$O_2(g) + 4H^+ + 4e^- \rightleftharpoons 2H_2O$		+ 1,23
$MnO_2 + 4H^+ + 2e^- \rightleftharpoons Mn^{2+} + 2H_2O$		+ 1,23
$Pt^{2+} + 2e^- \rightleftharpoons Pt$		+ 1,20
$Br_2(l) + 2e^- \rightleftharpoons 2Br^-$		+ 1,07
$NO_3^- + 4H^+ + 3e^- \rightleftharpoons NO(g) + 2H_2O$		+ 0,96
$Hg^{2+} + 2e^- \rightleftharpoons Hg(l)$		+ 0,85
$Ag^+ + e^- \rightleftharpoons Ag$		+ 0,80
$NO_3^- + 2H^+ + e^- \rightleftharpoons NO_2(g) + H_2O$		+ 0,80
$Fe^{3+} + e^- \rightleftharpoons Fe^{2+}$		+ 0,77
$O_2(g) + 2H^+ + 2e^- \rightleftharpoons H_2O_2$		+ 0,68
$I_2 + 2e^- \rightleftharpoons 2I^-$		+ 0,54
$Cu^+ + e^- \rightleftharpoons Cu$		+ 0,52
$SO_2 + 4H^+ + 4e^- \rightleftharpoons S + 2H_2O$		+ 0,45
$2H_2O + O_2 + 4e^- \rightleftharpoons 4OH^-$		+ 0,40
$Cu^{2+} + 2e^- \rightleftharpoons Cu$		+ 0,34
$SO_4^{2-} + 4H^+ + 2e^- \rightleftharpoons SO_2(g) + 2H_2O$		+ 0,17
$Cu^{2+} + e^- \rightleftharpoons Cu^+$		+ 0,16
$Sn^{4+} + 2e^- \rightleftharpoons Sn^{2+}$		+ 0,15
$S + 2H^+ + 2e^- \rightleftharpoons H_2S(g)$		+ 0,14
$2H^+ + 2e^- \rightleftharpoons H_2(g)$		<b>0,00</b>
$Fe^{3+} + 3e^- \rightleftharpoons Fe$		- 0,06
$Pb^{2+} + 2e^- \rightleftharpoons Pb$		- 0,13
$Sn^{2+} + 2e^- \rightleftharpoons Sn$		- 0,14
$Ni^{2+} + 2e^- \rightleftharpoons Ni$		- 0,27
$Co^{2+} + 2e^- \rightleftharpoons Co$		- 0,28
$Cd^{2+} + 2e^- \rightleftharpoons Cd$		- 0,40
$Cr^{3+} + e^- \rightleftharpoons Cr^{2+}$		- 0,41
$Fe^{2+} + 2e^- \rightleftharpoons Fe$		- 0,44
$Cr^{3+} + 3e^- \rightleftharpoons Cr$		- 0,74
$Zn^{2+} + 2e^- \rightleftharpoons Zn$		- 0,76
$2H_2O + 2e^- \rightleftharpoons H_2(g) + 2OH^-$		- 0,83
$Cr^{2+} + 2e^- \rightleftharpoons Cr$		- 0,91
$Mn^{2+} + 2e^- \rightleftharpoons Mn$		- 1,18
$Al^{3+} + 3e^- \rightleftharpoons Al$		- 1,66
$Mg^{2+} + 2e^- \rightleftharpoons Mg$		- 2,36
$Na^+ + e^- \rightleftharpoons Na$		- 2,71
$Ca^{2+} + 2e^- \rightleftharpoons Ca$		- 2,87
$Sr^{2+} + 2e^- \rightleftharpoons Sr$		- 2,89
$Ba^{2+} + 2e^- \rightleftharpoons Ba$		- 2,90
$Cs^+ + e^- \rightleftharpoons Cs$		- 2,92
$K^+ + e^- \rightleftharpoons K$		- 2,93

Increasing oxidising ability/*Toenemende oksiderende vermoë*

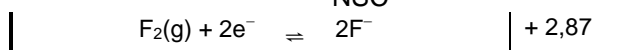
Increasing reducing ability/*Toenemende reduserende vermoë*

$\text{Li}^+ + \text{e}^- \rightleftharpoons \text{Li}$	- 3,05
---	--------

TABLE 4B: STANDARD  
TABEL 4B: STANDAARD-

Half-reactions/Halfreaksies	$E^\theta$ (V)
$\text{Li}^+ + \text{e}^- \rightleftharpoons \text{Li}$	- 3,05
$\text{K}^+ + \text{e}^- \rightleftharpoons \text{K}$	- 2,93
$\text{Cs}^+ + \text{e}^- \rightleftharpoons \text{Cs}$	- 2,92
$\text{Ba}^{2+} + 2\text{e}^- \rightleftharpoons \text{Ba}$	- 2,90
$\text{Sr}^{2+} + 2\text{e}^- \rightleftharpoons \text{Sr}$	- 2,89
$\text{Ca}^{2+} + 2\text{e}^- \rightleftharpoons \text{Ca}$	- 2,87
$\text{Na}^+ + \text{e}^- \rightleftharpoons \text{Na}$	- 2,71
$\text{Mg}^{2+} + 2\text{e}^- \rightleftharpoons \text{Mg}$	- 2,36
$\text{Al}^{3+} + 3\text{e}^- \rightleftharpoons \text{Al}$	- 1,66
$\text{Mn}^{2+} + 2\text{e}^- \rightleftharpoons \text{Mn}$	- 1,18
$\text{Cr}^{2+} + 2\text{e}^- \rightleftharpoons \text{Cr}$	- 0,91
$2\text{H}_2\text{O} + 2\text{e}^- \rightleftharpoons \text{H}_2(\text{g}) + 2\text{OH}^-$	- 0,83
$\text{Zn}^{2+} + 2\text{e}^- \rightleftharpoons \text{Zn}$	- 0,76
$\text{Cr}^{3+} + 3\text{e}^- \rightleftharpoons \text{Cr}$	- 0,74
$\text{Fe}^{2+} + 2\text{e}^- \rightleftharpoons \text{Fe}$	- 0,44
$\text{Cr}^{3+} + \text{e}^- \rightleftharpoons \text{Cr}^{2+}$	- 0,41
$\text{Cd}^{2+} + 2\text{e}^- \rightleftharpoons \text{Cd}$	- 0,40
$\text{Co}^{2+} + 2\text{e}^- \rightleftharpoons \text{Co}$	- 0,28
$\text{Ni}^{2+} + 2\text{e}^- \rightleftharpoons \text{Ni}$	- 0,27
$\text{Sn}^{2+} + 2\text{e}^- \rightleftharpoons \text{Sn}$	- 0,14
$\text{Pb}^{2+} + 2\text{e}^- \rightleftharpoons \text{Pb}$	- 0,13
$\text{Fe}^{3+} + 3\text{e}^- \rightleftharpoons \text{Fe}$	- 0,06
$2\text{H}^+ + 2\text{e}^- \rightleftharpoons \text{H}_2(\text{g})$	0,00
$\text{S} + 2\text{H}^+ + 2\text{e}^- \rightleftharpoons \text{H}_2\text{S}(\text{g})$	+ 0,14
$\text{Sn}^{4+} + 2\text{e}^- \rightleftharpoons \text{Sn}^{2+}$	+ 0,15
$\text{Cu}^{2+} + \text{e}^- \rightleftharpoons \text{Cu}^+$	+ 0,16
$\text{SO}_4^{2-} + 4\text{H}^+ + 2\text{e}^- \rightleftharpoons \text{SO}_2(\text{g}) + 2\text{H}_2\text{O}$	+ 0,17
$\text{Cu}^{2+} + 2\text{e}^- \rightleftharpoons \text{Cu}$	+ 0,34
$2\text{H}_2\text{O} + \text{O}_2 + 4\text{e}^- \rightleftharpoons 4\text{OH}^-$	+ 0,40
$\text{SO}_2 + 4\text{H}^+ + 4\text{e}^- \rightleftharpoons \text{S} + 2\text{H}_2\text{O}$	+ 0,45
$\text{Cu}^+ + \text{e}^- \rightleftharpoons \text{Cu}$	+ 0,52
$\text{I}_2 + 2\text{e}^- \rightleftharpoons 2\text{I}^-$	+ 0,54
$\text{O}_2(\text{g}) + 2\text{H}^+ + 2\text{e}^- \rightleftharpoons \text{H}_2\text{O}_2$	+ 0,68
$\text{Fe}^{3+} + \text{e}^- \rightleftharpoons \text{Fe}^{2+}$	+ 0,77
$\text{NO}_3^- + 2\text{H}^+ + \text{e}^- \rightleftharpoons \text{NO}_2(\text{g}) + \text{H}_2\text{O}$	+ 0,80
$\text{Ag}^+ + \text{e}^- \rightleftharpoons \text{Ag}$	+ 0,80
$\text{Hg}^{2+} + 2\text{e}^- \rightleftharpoons \text{Hg}(\text{l})$	+ 0,85
$\text{NO}_3^- + 4\text{H}^+ + 3\text{e}^- \rightleftharpoons \text{NO}(\text{g}) + 2\text{H}_2\text{O}$	+ 0,96
$\text{Br}_2(\text{l}) + 2\text{e}^- \rightleftharpoons 2\text{Br}^-$	+ 1,07
$\text{Pt}^{2+} + 2\text{e}^- \rightleftharpoons \text{Pt}$	+ 1,20
$\text{MnO}_2 + 4\text{H}^+ + 2\text{e}^- \rightleftharpoons \text{Mn}^{2+} + 2\text{H}_2\text{O}$	+ 1,23
$\text{O}_2(\text{g}) + 4\text{H}^+ + 4\text{e}^- \rightleftharpoons 2\text{H}_2\text{O}$	+ 1,23
$\text{Cr}_2\text{O}_7^{2-} + 14\text{H}^+ + 6\text{e}^- \rightleftharpoons 2\text{Cr}^{3+} + 7\text{H}_2\text{O}$	+ 1,33
$\text{Cl}_2(\text{g}) + 2\text{e}^- \rightleftharpoons 2\text{Cl}^-$	+ 1,36
$\text{MnO}_4^- + 8\text{H}^+ + 5\text{e}^- \rightleftharpoons \text{Mn}^{2+} + 4\text{H}_2\text{O}$	+ 1,51
$\text{H}_2\text{O}_2 + 2\text{H}^+ + 2\text{e}^- \rightleftharpoons 2\text{H}_2\text{O}$	+ 1,77
$\text{Co}^{3+} + \text{e}^- \rightleftharpoons \text{Co}^{2+}$	+ 1,81

REDUCTION POTENTIALS  
REDUKSIEPOTENSIALE



Increasing oxidising ability/*Toenemende oksiderende vermoë*

Increasing reducing ability/*Toenemende reduserende vermoë*

Copyright reserved

served

Please turn over



# education

DEPARTMENT: EDUCATION  
MPUMALANGA PROVINCE

## NATIONAL SENIOR CERTIFICATE EXAMINATION

**GRADE 12**

**PHYSICAL SCIENCES: PHYSICS (P2)**

**June 2021**

**MARKING GUIDELINE**

**MARKS/PUNTE: 150**

**This memorandum consists of 11 pages**

**Hierdie memorandum bestaan uit 11 bladsye**

### QUESTION 1 / VRAAG 1

1.1 D ✓✓

1.2 B ✓✓

1.3 C ✓✓

1.4 B ✓✓

1.5 C ✓✓

1.6 C ✓✓

1.7 D ✓✓

1.8 A ✓✓

1.9 C ✓✓

1.10 B ✓✓

[20]

### QUESTION 2 / VRAAG 2

2.1.1 F ✓ (1)

2.1.2 G ✓ (1)

2.1.3 C ✓ (1)

2.2.1  ✓✓ (2)

2.2.2 Carboxylic acid / Karboksielsuur ✓ (1)

2.2.3 Propyl propanoate / Propielpropanoat ✓ (2)

2.2.4 3-bromo-2-chloro-3,4-dimethylpentane / 3-broom-2-chloor-3,4-dimetiehpentaan

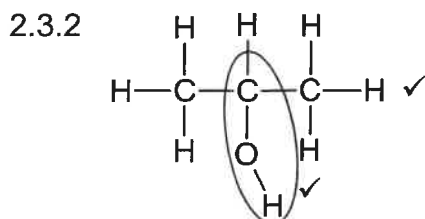
#### Marking criteria / Nasienriglyne

- 3-bromo-2-chloro / 3-broom-2-chloor ✓
- 3,4-dimethyl / 3,4-dimetie ✓
- Pentane / pentaan ✓
- Any error e.g. hyphens omitted and/or incorrect sequence Max / Maks  $\frac{2}{3}$

(3)



- 2.3.1 The C atom bonded to the functional group / hydroxyl (group) / -OH ✓ is bonded to one other C atom. ✓  
 Die C-atoom gebind aan die funksionele groep/hidroksiel (groep)/-OH is gebind aan slegs een ander C-atoom (2)



**Marking criteria / Nasienriglyne**

- Only functional group correct / Slegs funksionele groep korrek ✓
- Whole structure correct / Hele struktuur korrek ✓

(2)

- 2.4.1 Compound B is an alkene and it has one or more multiple bonds between C atoms in its hydrocarbon chains. ✓  
 Verbinding B is 'n alkeen waarin een of meer meervoudige bindings voorkom tussen C-atome in hul koolwaterstofkettings. (1)

- 2.4.2 Bromine water/Broomwater✓ (1)

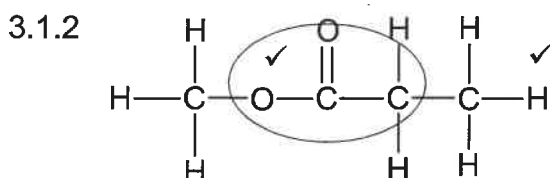
- 2.4.3 The orange brown colour of bromine water will disappear immediately/decolourises immediately✓✓  
 Die oranjebruin kleur van die broom water gaan dadelik verdwyn/ ontkleur dadelik (2)

- 2.4.4 Chloroethane / Chloor etaan✓✓ (2)

[21]

**QUESTION 3 / VRAAG 3**

- 3.1.1 Type of compound/homologous series/ Tipe verbinding / homoloëreeks ✓ (1)



**Marking criteria / Nasienriglyne**

- Only functional group correct / Slegs funksionele groep korrek ✓
- Whole structure correct / Hele struktuur korrek ✓

(2)

- 3.1.3 79,8 °C✓ (1)

- 3.1.4 138,5°C ✓ (1)

- 3.2
- In **R**/Methyl propanoate/Ester: dipole-dipole forces✓ (in addition to London forces/dispersion forces/induced dipole forces.
  - In **S**/ Pentan-1-ol: Hydrogen bonding✓ (in addition to London forces/dispersion forces/induced dipole forces.
  - Intermolecular forces in R/ methyl propanoate are weaker✓ than in **S**/pentan-1-ol.  
**OR** intermolecular forces in **T**/pentan-1-ol are stronger than methyl propanoate/ ester **OR** dipole-dipole forces are weaker than hydrogen bonds in **S**

- More energy needed to overcome/break intermolecular forces in S.✓
- In R /metielpropanoaat/Ester: dipool-dipoolkragte (tesame met Londonkragte / dispersiekragte/geïnduseerde dipoolkragte).
- In S / pentan-1-ol: Waterstofbindings (tesame met Londonkragte / dispersiekragte / geïnduseerde dipoolkragte).
- Intermolekulêre kragte in R swakker as in S / pentan-1-ol OF intermolekulêre kragte in S/ pentan-1-ol is sterker as in P/ metielpropanoaat/ester. OR dipool-dipoolkragte is swakker as waterstofbindings
- Meer energie benodig om intermolekulêre kragte te oorkom / breek in S. (4)

3.3.1 The pressure exerted by a vapour ✓ at equilibrium with its liquid in a closed system.✓

Die druk uitgeoefen deur 'n damp in ewewig met sy vloeistof in 'n geslote sisteem (2)

3.3.2  $2\text{C}_6\text{H}_{14} + 19\text{O}_2 \rightarrow 12\text{CO}_2 + 14\text{H}_2\text{O}$  ✓ bal✓

#### Notes/ Aantekeninge

- |                                |              |               |
|--------------------------------|--------------|---------------|
| • Reactants ✓                  | • Products ✓ | • Balancing ✓ |
| • Reaktante                    | • Produkte   | • Balansering |
| • Marking rule /Nasienreël 3.9 |              |               |



(3)

3.3.3 P✓

(1)

- 3.3.4
- **P** is less branched / less compact / less spherical/longer chain length / larger surface area (over which intermolecular forces act).✓  
*P is minder vertak / minder kompak / minder sferies / langer kettinglengte / groter oppervlak (waaroor intermolekulêre kragte werk).*
  - Stronger / more intermolecular forces / Van der Waals forces / London forces / dispersion forces. ✓  
*Sterker / meer intermolekulêre kragte / Van der Waalskragte / Londonkragte / dispersiekragte.*
  - More energy needed to overcome or break intermolecular forces / Van der Waals forces. ✓  
*More energie benodig om intermolekulêre kragte / Van der Waalskragte/ dispersiekragte / London-kragte te oorkom.*

**OR**

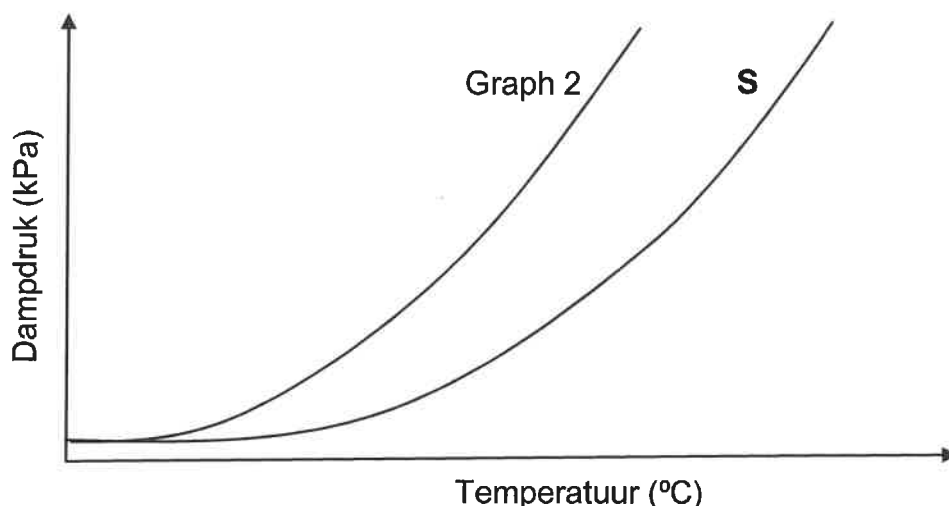
- **Q** is more branched / more compact / more spherical/shorter chain length / smaller surface area (over which intermolecular forces act).✓  
*Q is meer vertak / meer kompak / meer sferies / korter kettinglengte / kleiner oppervlak (waaroor intermolekulêre kragte werk).*
- Weaker / less intermolecular forces / Van der Waals forces / London forces / dispersion forces. ✓  
*Swakker / minder intermolekulêre kragte / Van der Waalskragte / Londonkragte / dispersiekragte.*
- Less energy needed to overcome or break intermolecular forces / Van der Waals forces. ✓  
*Minder energie benodig om intermolekulêre kragte / Van der Waalskragte/*

(3)



dispersiekrigte / London-krigte te oorkom.

3.3.5



**Marking guidelines/ Nasienriglyne**

- Starting at the same pressure / Begin by dieselfde druk ✓
- Graph **S** must be below Graph 2 / Grafiek **S** moet onder Grafiek 2 wees ✓

(2)  
 [20]

**QUESTION 4/ VRAAG 4**

4.1.1 Organic compounds that consist of hydrogen and carbon only. ✓✓  
*Organiese verbindings wat slegs uit waterstof en koolstof bestaan.*

(2)

4.1.2 Pentane /Pentaan ✓

(1)

4.2.1 Halogenation / Substitution /Halogenering / Substitusie ✓

(1)

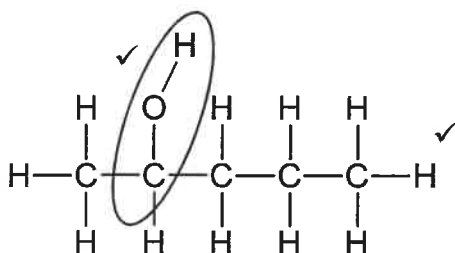
4.2.2 Hydration /Addition / Hidrasie / Hidratering /Addisie✓

(1)

4.2.3 Hydrolysis/Substitution / Hidrolise/Substitusie✓

(1)

4.3



**Marking criteria / Nasienriglyne**

- Only functional group correct / Slegs funksionele groep korrek ✓
- Whole structure correct / Hele struktuur korrek ✓

**Notes / Aantekeninge**

- Accept -OH as condensed. / Aanvaar -OH as gekondenseer ✓
- Condensed structural formula / Gekondenseerde struktuurformule✓ Maks: 1/2

Propan-2-ol / 2-Propanol ✓

**Notes / Aantekeninge**

- Whole name correct / *Hele naam korrek* ✓

(3)

4.4 Hydrohalogenation / *Hidrohalogenasie / Hidrohalogenering* ✓

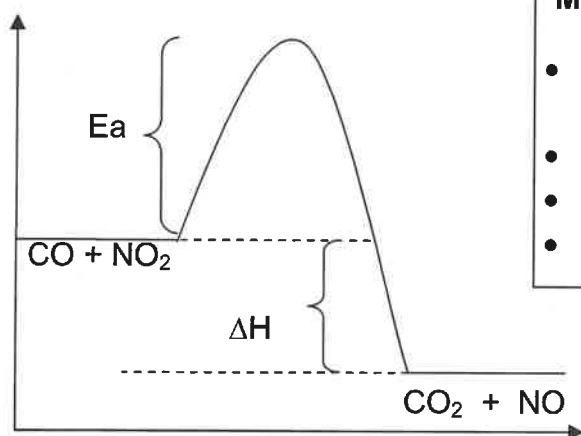
(1)

4.5 Reaction 2 / *Reaksie 2* ✓

(1)

**[11]****QUESTION 5/ VRAAG 5**

5.1

**Marking criteria / Nasienriglyne**

- reactants and products / *reaktante en produkte* ✓
- activation energy / *aktiveringsenergie* ✓
- heat of reaction / *reaksiewarmte* ✓
- shape / *vorm van grafiek* ✓



(4)

5.2 A catalyst is a substance that increase the rate of the chemical reaction without undergo a permanent change itself. / A substance that increases the rate of a reaction by providing an alternative path of lower activation energy. ✓✓  
*'n Katalisator is 'n stof wat die tempo van 'n chemiese reaksie verhoog sonder om self 'n permanente verandering te ondergaan. Is 'n stof wat die tempo van 'n reaksie verhoog deur 'n alternatiewe roete van laer aktiveringsenergie te verskaf*

(2)

5.3 Platinum. ✓

- A catalyst decreases the activation energy by providing an alternative route for the reaction to take place. ✓  
*'n Katalisator verlaag die aktiveringsenergie en verskaf 'n alternatiewe roete vir die reaksie om plaas te vind.*
- The lower the activation energy the higher the rate of reaction. ✓  
*Hoe laer die aktiverings energie hoe hoër die tempo van die reaksie.*
- More particles have  $E_K \geq E_A$  / More particles have a  $E_K$  that is equal or greater than  $E_A$  ✓  
*Meer deeltjies het 'n  $E_K \geq E_A$  / Meer deeltjie het 'n groter  $E_K$  om die  $E_a$  te oorkom.*

(4)

**QUESTION 6 / VRAAG 6**

6.1	<b>Criteria for investigative question / Riglyne vir ondersoekende vraag</b>	
	The dependent and independent variables are stated. <i>Die afhanklike en onafhanklike veranderlikes is genoem.</i>	✓
	Ask a question about the relationship between the independent and dependent variables. <i>Vra 'n vraag oor die verwantskap tussen die onafhanklike en afhanklike veranderlikes.</i>	✓

**Example / Voorbeeld**

What is the relationship between the concentration of sulphuric acid and the rate of the reaction? / *Wat is die verhouding tussen die konsentrasie van swawelsuur en die tempo van die reaksie?* ✓ ✓

(2)

6.2 temperature/mass of Mg/surface area of Mg/ *temperatuur/ massa van Mg/ reaksieoppervlak van Mg* ✓

(1)

6.3 Decrease / *Afneem* ✓

(1)

6.4 Less particles are available for collisions to take place / Fewer particles are exposed ✓

Less particles collide with correct orientation ✓

Less effective collisions per unit time/per second ✓

*Minder deeltjies is beskikbaar vir botsings om plaas te vind.*

*Minder deeltjies bots met die regte oriëntasie*

*Minder effektiewe botsings per eenheids tyd/per sekonde.*

(3)

6.5 Increase / *Toeneem* ✓

(1)

6.6  $c = \frac{n}{V}$  ✓  
 $0,3 = \frac{n}{0,2}$  ✓  
 $n = 0,06 \text{ mol}$

$n(\text{HCl}) = \frac{1}{2} n(\text{CO}_2)$   
 $n(\text{CO}_2) = 0,03 \text{ mol}$  ✓

$n = \frac{V}{V_m}$   
 $0,03 = \frac{V}{22,4}$   
 $V = 0,672 \text{ dm}^3$  ✓

**Marking criteria / Nasienriglyne**

- Any formula/*Enige formule*:  $c = \frac{n}{V}$  /  $n = \frac{V}{V_m}$  ✓
- Substitution of / *Vervanging van* 0,3 and 0,2 ✓
- Use mol ratio / *Gebruik molverhouding*: 2:1  
 $n(\text{HCl}) = \frac{1}{2} n(\text{CO}_2)$  ✓ ✓
- Final answer / *Finale antwoord*:  $0,672 \text{ dm}^3$  ✓

(4)

6.8  $\text{rate/tempo} = \frac{\Delta V}{\Delta t}$

(3)

$$= \frac{0,672 - (0) \checkmark}{20 - (0) \checkmark}$$

$$V = 0,03 \text{ (dm}^3 \cdot \text{s}^{-1}) \checkmark$$

6.9 Equal to / Gelyk aan ✓

(1)  
[16]

## QUESTION 7 / VRAAG 7

7.1 (The stage in a chemical reaction when the) rate of the forward reaction equals the rate of reverse reaction. ✓✓

(Die stadium in 'n chemiese reaksie wanneer die) tempo van die voorwaartse reaksie gelyk is aan die tempo van die terugwaartse reaksie.

(2)

7.2.1 The pressure of both reactions increases/ the volume decreased, and the concentration of both the reactants and products increases. ✓ Both reaction rates increase. ✓

Die druk vir beide reaksie is verhoog /die volume verminder wat veroorsaak dat die konsentrasie van beide die reaktante en produkte verhoog. Beide reaksie tempo's word verhoog.

(2)

7.2.2 Reverse / Terugwaars ✓

(1)

7.2.3 When pressure is increased the reaction that leads to the smaller amount of mole of gas is favoured. ✓

The reverse reaction is favoured, more A<sub>2</sub>B is formed/more reactants are formed. ✓

Wanneer die druk verhoog word die reaksie wat tot die kleiner hoeveelheid mol bevoordeel.

Die terugwaartse reaksie word bevoordeel, meer A<sub>2</sub>B word gevorm/meer reaktante word gevorm.

(2)

7.3 Endothermic / Endotermies ✓

Decrease in temperature favours the exothermic reaction ✓

The reverse reaction is favoured /The number of moles of A<sub>2</sub>B increases /The concentration of A<sub>2</sub>B increases / The amount of product decreases. ✓

Afname in temperatuur bevoordeel die eksotermiese reaksie

Terugwaartse reaksie word bevoordeel./ Die getal mol A<sub>2</sub>B neem toe/ Die konsentrasie van A<sub>2</sub>B verhoog / Die hoeveelheid produkte verlaag

(3)

7.4 A catalyst was added. / 'n Katalisator is bygevoeg.

(1)

7.5 Remains the same. ✓

A catalyst was added to the reaction ✓ both the rate of the forward and reverse reaction increased. ✓

Bly dieselfde.

'n Katalisator is by die reaksie gevoeg. die tempo van beide die voorwaartse en terugwaartse reaksies verhoog.

(3)

7.6.1 No effect / Geen effek. ✓

(1)

7.6.2 Decrease ✓

(1)

7.7 **CALCULATIONS USING NUMBER OF MOLES BEREKENINGE WAT GETAL MOL GEBRUIK**

**Marking guidelines / Nasienriglyne**

- $n(A_2 \text{ and } B_2)_{\text{change/verandering}} = n(A_2 \text{ and } B_2)_{\text{initial/begin}} - n(A_2 \text{ and } B_2)_{\text{final/finaal}}$  ✓
- Use mole ratio / *Gebruik molverhouding*: 2:2:1 ✓
- Calculation of volume / *Berekening van volume* ( $3 \text{ dm}^3$ ) ✓
- Divide moles at equilibrium with calculated volume / *Deel mol by ewewig deur berekende volume*. ✓
- Correct  $K_c$  expression / *Korrekte  $K_c$ -uitdrukking* ✓
- Substitution of concentration into  $K_c$  expression / *Vervanging van konsentrasies in  $K_c$ -uitdrukking*. ✓
- Final answer / *Finale antwoord*. (3,456) ✓

	$2A_2B$	$2A_2$	$B_2$
Initial quantity (mol) Aanvangs hoeveelheid (mol)	5,1	0	0
Change (mol) Verandering (mol)	-3,6	+3,6	+1,8
Quantity at equilibrium (mol) Hoeveelheid by ewewig (mol)	1,5	3,6	1,8
Equilibrium concentration ( $\text{mol} \cdot \text{dm}^{-3}$ ) Ewewigskonsentrasie ( $\text{mol} \cdot \text{dm}^{-3}$ )	0,5	1,2	0,6

Ratio ✓

Change in  $A_2B$   
and  $B_2$  ✓

Divide by  
volume ✓

$$K_c = \frac{[A_2]^2[B_2]}{[A_2B]^2} \quad \checkmark$$

$$= \frac{(1,2)^2(0,6)}{(0,5)^2} \quad \checkmark$$

$$= 3,456 \quad \checkmark$$

$$c = \frac{n}{V}$$

$$1,2 = \frac{3,6}{V}$$

$$V = 3 \text{ dm}^3$$



**CALCULATIONS USING CONCENTRATION / BEREKENINGE WAT KONSENTRASIE GEBRUIK**

**Marking guidelines / Nasienriglyne**

- Calculation of volume / *Berekening van volume* ( $3 \text{ dm}^3$ ) ✓
- Initial  $n(A_2B)$  divide by  $3 \text{ dm}^3$ . / *Aanvanklike  $n(A_2B)$  gedeel deur  $3 \text{ dm}^3$* . ✓
- $c(A_2 \text{ and } B_2)_{\text{change/verandering}} = c(A_2 \text{ and } B_2)_{\text{initial/begin}} - c(A_2 \text{ and } B_2)_{\text{final/finaal}}$  ✓
- Use mole ratio / *Gebruik molverhouding*: 2:2:1 ✓
- Correct  $K_c$  expression / *Korrekte  $K_c$ -uitdrukking* ✓
- Substitution of concentration into  $K_c$  expression / *Vervanging van konsentrasies in  $K_c$ -uitdrukking*. ✓
- Final answer / *Finale antwoord*. (3,456) ✓

	2A <sub>2</sub> B	2A <sub>2</sub>	B <sub>2</sub>
Initial concentration (mol·dm <sup>-3</sup> ) Aanvangs konsentrasie (mol·dm <sup>-3</sup> )	1,7✓	0	0
Change (mol·dm <sup>-3</sup> ) Verandering (mol·dm <sup>-3</sup> )	1,2	1,2	0,6
Equilibrium concentration (mol·dm <sup>-3</sup> ) Ewewigskonsentrasie (mol·dm <sup>-3</sup> )	0,5	1,2	0,6

Ratio ✓

Change in A<sub>2</sub>B  
and B<sub>2</sub> ✓

$$K_c = \frac{[A_2]^2[B_2]}{[A_2B]^2} \quad \checkmark$$

$$c = \frac{n}{V}$$

$$1,2 = \frac{3,6}{V}$$

$$= \frac{(1,2)^2(0,6)}{(0,5)^2} \quad \checkmark$$

$$V = 3 \text{ dm}^3 \quad \checkmark$$

$$= 3,456 \quad \checkmark$$

(7)  
[23]

### QUESTION 8 / VRAAG 8

8.1.1 It can donate two protons per molecule. ✓✓  
 Dit kan twee protone skenk per molekule.

(2)

8.1.2  $\text{pH} = -\log [\text{H}_3\text{O}^+] \quad \checkmark$   
 $= -\log (0,5) \quad \checkmark$   
 $= 0,3 \quad \checkmark$

$$c[\text{H}_3\text{O}^+] = 2(0,25) = 0,5 \text{ mol} \cdot \text{dm}^{-3} \quad \checkmark$$

(4)

8.1.3  $c_1V_1 = c_2V_2 \quad \checkmark$   
 $(0,25)(20) = (0,1) V_2 \quad \checkmark$   
 $V_2 = 50 \text{ cm}^3 / 0,05 \text{ dm}^3 \quad \checkmark$   
 Add 30 cm<sup>3</sup> / 0,03 dm<sup>3</sup> water / Voeg 30 cm<sup>3</sup> / 0,03 dm<sup>3</sup> water by ✓

(4)

8.2  $\text{NH}_4^+ + \text{H}_2\text{O} \rightleftharpoons \text{NH}_3 + \text{H}_3\text{O}^+ \quad \checkmark$   
 The H<sub>3</sub>O<sup>+</sup> ions formed is a strong acid. / Die H<sub>3</sub>O<sup>+</sup> ione gevorm is 'n sterk suur. ✓

(3)

8.3.1 Ampholyte/Amfoliet ✓

(1)

8.3.2 H<sub>2</sub>O ✓ and/en SO<sub>4</sub><sup>2-</sup> ✓

(2)

8.4.1 No change/ Geen verandering ✓

(1)

8.4.2 Decreases/ Afneem ✓

(1)

8.5.1  $n = c \times V \quad \checkmark$

(3)

$$= 0,8 \times 0,05 \checkmark$$

$$= 0,04 \text{ mol} \checkmark$$

8.5.2

**Marking criteria / Nasienriglyne**

- Calculate the number of moles of NaOH ✓  
*Bereken die getal mol van NaOH*
- Use of ratio (NaOH: HCl) - 1:1 ✓  
*Gebruik die verhouding (NaOH: HCl) - 1:1*
- Calculate the number of moles of HCl that reacted ✓  
*Bereken die getal mol HCl wat gereageer het*
- Use of ratio (HCl: MgO) - 2:1 ✓  
*Gebruik van verhouding (HCl: MgO) - 2:1*
- Use of formula  $m = n \times M$  ✓  
*Gebruik formule  $m = n \times M$*
- Use of molar mass 40 ✓
- Final answer / Finale antwoord ✓



$$n(\text{NaOH}) = c \times V$$

$$= 0,5 \times 0,02$$

$$= 0,01 \text{ mol} \checkmark$$

$$n(\text{HCl}) = n(\text{NaOH}) = 0,01 \text{ mol} \checkmark$$

0,01 mol HCl was in excess

$$0,04 - 0,01 \checkmark = 0,03 \text{ mol HCl reacted}$$

$$n(\text{MgO}) = \frac{1}{2} n(\text{HCl}) = 0,015 \text{ mol} \checkmark$$

0,015 mol MgO reacted ✓

$$m = n \times M \checkmark$$

$$= 0,015 \times 40 \checkmark$$

$$= 0,6 \text{g}$$

$$\% \text{ MgO} = \frac{0,6}{0,96} \times 100 = 62,5\% \checkmark$$

(8)  
[29]

**TOTAL 150**